

KAMPALA QUALITY PRIMARY SCHOOL

P.3 REMEDIAL REVISION SET 4, 2020

LITERACY 1 A

Name:

Stream :District.....

FOR
EXAMINER'S
USE ONLY

Read the following instructions carefully:

1. The paper has two sections: **A** and **B**.
2. Section **A** has 40 questions (40 marks)
3. Section **B** has 15 questions (60 marks).
4. Answer **all** questions. All answers to both Sections **A** and **B** must be written in the Spaces provided.
5. All answers must be written using a blue or black ball point pen or ink. Diagrams should be drawn in pencil.
6. Unnecessary alteration of work may lead to loss of marks.
7. Any handwriting that can not easily be read may lead to loss of marks.
8. Do not fill any thing in the boxes. They are for examiner's use.

FOR EXAMINERS' USE ONLY

Qn No.	MARKS	SIGN.
1 – 10		
11-20		
21-30		
31- 40		
41 - 43		
44 - 46		
47 - 49		
50 - 52		
53 – 55		
TOTAL		

SECTION A

1. In which municipality is your school found?

2. Mention one use of a broom in a home.

3. Why do we need vehicles in an importance in a hospital?


4. In which season do farmers plant their crops?

5. What do we call a group of people related by blood or marriage?

6. How important are farmers in our community?

7. Why do we need teachers in our school?

8. Who was the first Muganda?

9. Draw a map of a cup.

10. Why do people work hard?

11. Name any one group of people found in the hospitals.

12. Why do we keep cats at home?

13. Mention the quickest type of transport.

14. Why do soldiers put on uniforms?

15. Identify any one source of water.

17. A _____ is a drawing of an object as seen from aside.

18. What is environment? _____

19. State one colour found on the Uganda National Flag.


20. Which school symbol makes our school look smart?

21. How can a mother be useful in a home?

22. Why do you go to the library?

23. Name one crop grown in swamps.

24. Where do people keep their money safely?

25. Draw and name one building in your school.

26. How can we protect ourselves from rainy weather?

27. Why did early man keep dogs?

28. Why do we stand at attention when singing the school anthem?

29. What do we call the movement of people or goods from one place to another?

30. How many people make up the Local Council One Committee?

31. Who is a child? _____

32. In which direction does the sun set?

33. Mention any one example of a clan symbol.

34. Why do you need to study hard?

35. Write one thing got from wood.

For questions 36 -40, answer either Christianity or Islam but not both on the same number

36. ***Either:*** Write your Christian name.

Or: Write your Muslim name.

37. ***Either:*** Why did God create the sun?

Or: Why did Allah create water bodies?

38. ***Either:*** How can you help someone who is sick?

Or: How can you help someone who is lame.

39. ***Either:*** Name the holy book for Christians.

Or: Mention the holy book for Muslims.

40. ***Either:*** In how many days did God create the World?

Or: In how many days did Allah create the World?

SECTION B

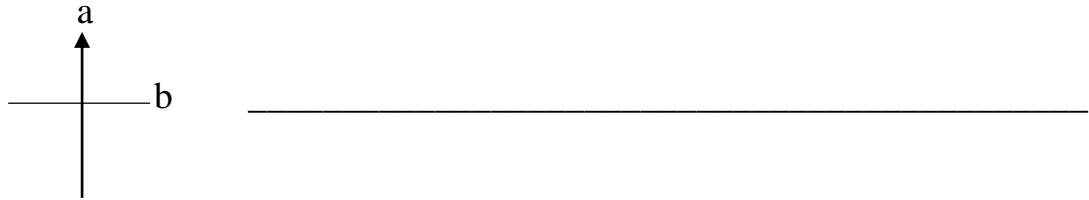
41. (a) What are physical features? _____

(b) List down any two examples of land forms.

(i) _____ (ii) _____

(c) Give one use of lakes to man.

42. (a) Name the symbol shown below.



(b) How useful is the symbol shown above?

(c) Identify any two groups of people who use a compass in their daily lives.

(i) _____ (ii) _____

43. (a) What term refers to the sending and receiving of messages?

(b) Mention any two means of communication.

(i) _____ (ii) _____

(c) Why do we need phones in our homes?

44. (a) Draw and name any four examples of crafts.

45. (a) Write any two social activities done in our municipality.

(i) _____

(ii) _____

(b) Why do people grow crops and rear animals?

(i) _____

(ii) _____

46. (a) Who heads a clan? _____

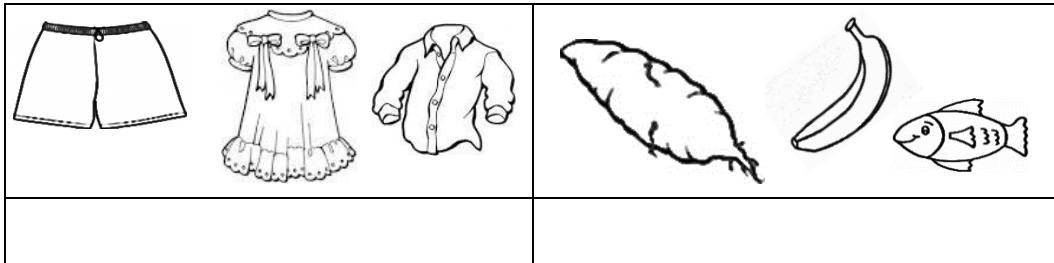
(b) Identify one duty of a clan head.

(c) List down any two clan symbols.

(i) _____ (ii) _____

47. (a) What are basic needs?

(b) Name these basic needs.



(c) Why do people need to eat food?

48. (a) What is a school?

(b) Mention any two school symbols.

(i) _____ (ii) _____

(c) Why does a school need vehicles?

49. Match correctly

List A

Basoga

Batooro

Baganda

Iteso

List B

Luganda

Ateso

Lusoga

Rutooro

(a) Basoga _____

(b) Batooro _____

(c) Baganda _____

(d) Iteso _____

50. (a) Why are map symbols used on a map?

(b) Draw these map symbols.

hills	quarry	mountains

For questions 51-55, answer either Christianity or Islamic but not both on the same number.

51. ***Either:*** (a) Who was the earthly father of Jesus Christ?

(b) Name the mother of Jesus Christ.

(c) In which town was Jesus born?

(d) Why did Jesus die on the cross?

Or:

(a) Who were the parents of Prophet Muhammad?

(i) _____ (ii) _____

(b) Mention any two important cities in Islam

(i) _____

(ii) _____

52. ***Either;*** (a) List down any three groups of people who need our help.

(i) _____ (ii) _____

(ii) _____

(b) Why is it good to help the needy?

Or: (a) Identify any three groups of people who are given Zakat.

(i) _____ (ii) _____

(ii) _____

(c) Why do Muslims give Zakat?

53. **Either:** (a) Who is a leader? _____

(b) State any three examples of Christian leaders.

(i) _____ (ii) _____

(ii) _____

Or: (a) Who is a leader? _____

(b) Identify any three examples of leaders in Islam.

(i) _____ (ii) _____

(ii) _____

54. **Either:** Draw and name four things God created.

Or: Draw and name four things Allah created.

55. **Both**

(a) What are customs? _____

(b) Mention any two examples of customs.

(i) _____

(ii) _____

(c) Why do we kneel while greeting?
